

# Mathématiques (7)

## 1. Décompose les nombres sous forme additive (178=

**100+70+8).**

145 = .....

380 = .....

509 = .....

788 = .....

997 = .....

## 2. Trouve le nombre décomposé.

50+6 = .....

400+70+8 = .....

600+30+1 = .....

800+70+3 = .....

900+40+2 = .....

## 3. Trouve le nombre décomposé.

6c2d3u = .....

4u2d3c = .....

9c5u = .....

8d1c2u = .....

5c7d = .....

## 4. Je compare les nombres suivants en utilisant les

**signes <, >, =.**

100+20+6 ..... 189

258 ..... 200+10+3


127 ..... 589

200+30+6 ..... 325


900+8 ..... 908

800+22 ..... 812


## 5. Place les aiguilles sur chaque pendule :




7 H 05




9 H 45



12 H 30



3 H 50



4 H 15