


①

# La monnaie : sommes $\geq 20$ €

Dessine avec le moins de billets et de pièces possible.



20€

20 €




35€

20€

10€

5€



38€


20€

10€

5€

2€

1€




46€

20€

5€

1€

20€



49€

20€

5€

20€

2€

2€